




Name:

Date:



Key Stage 2 Maths Practice Reasoning: Simple Measure and Money Problems

Here are some fruits:



1. Calculate the cost of one of each fruit, and order them from least expensive to most expensive.

--	--	--	--	--

least expensive

most expensive

2. What is more expensive: 5 apples and a pineapple, or 12 oranges and 8 pears?

3. Amir has £3. Which 3 packs of fruit must he buy to spend as much of the £3 as possible?

4. The grocer reduces the price of the pineapple, 6 bananas and 12 small oranges by one third. What are the new prices?

5. The grocer adds 6 small oranges to the 12 oranges, but wants to sell each orange for the same price. What will be the new price for 18 oranges?

Here are some drinks sold by a supermarket. Use this information to help answer questions 6-10.



**1 litre Orange
Juice
96p**



**750ml Lemonade
96p**



**500ml Coke
64p**



**2 litre Fruit
Drink
£1.30**

6. Calculate the cost of 1 litre of each drink, and order from least expensive to most expensive.

--	--	--	--

least expensive

most expensive

7. Jane wants to buy a litre of each drink shown above. Explain why this is not possible.


8. Jane pours 1 litre of orange juice equally into 6 glasses. How much juice will be in each glass and how much would the juice in each glass cost?

9. Jane then pours 750g of lemonade equally into each glass. How much lemonade will be in each glass, and how much would the lemonade cost?

10. Jane intends to sell cups of orange juice and lemonade. She buys one bottle of each and will sell the cups for £1 each. An empty plastic cup holds 250ml and costs 16p. How much profit will Jane make altogether?



1 litre Orange Juice 96p

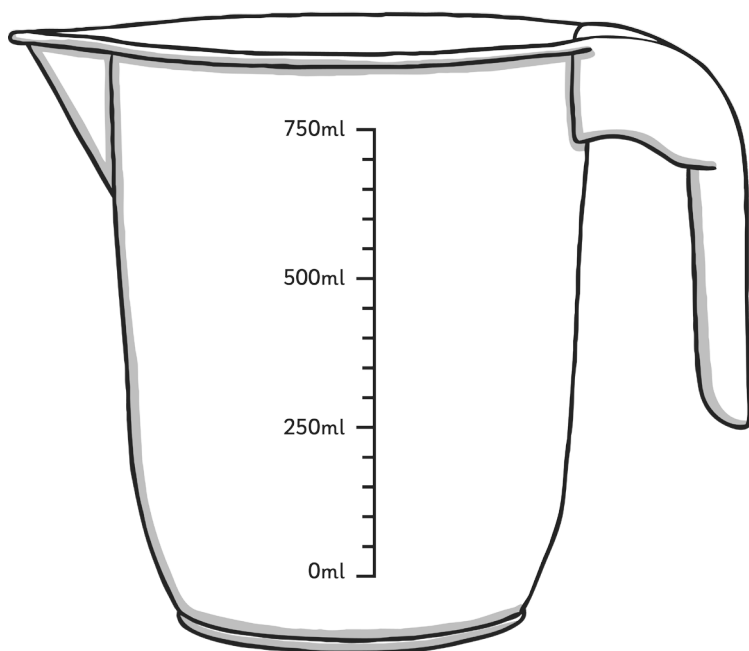


750ml Lemonade 96p

11. Complete the following table, calculating the fractions of each quantity.

	$\frac{1}{4}$	$\frac{1}{2}$	$\frac{2}{3}$	$\frac{3}{4}$
100ml	25ml			
250ml		125ml		
500ml				375ml
600ml				
800ml				
1 litre				750ml

12. Draw lines on the measuring jug below to show $\frac{1}{4}$ full, $\frac{1}{2}$ full, $\frac{2}{3}$ full and $\frac{3}{4}$ full, writing the correct amount of ml next to each line.



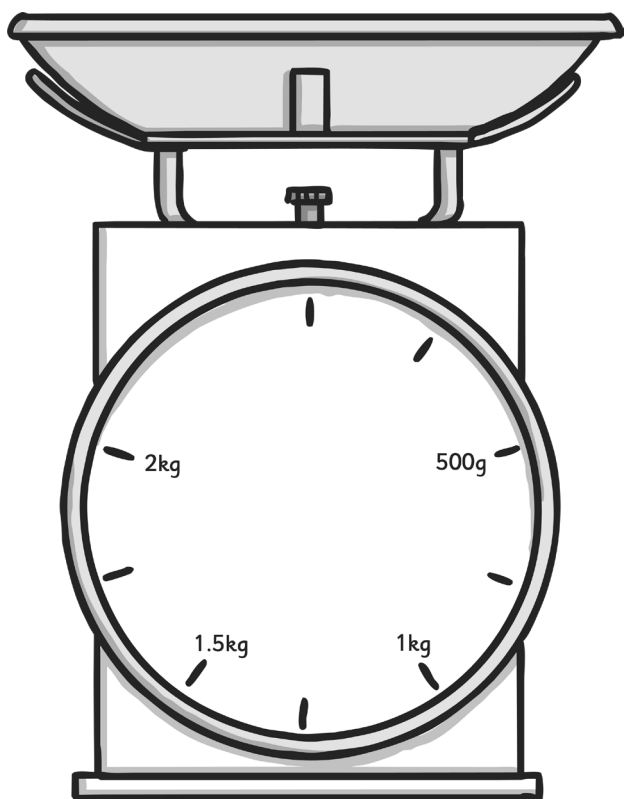
13. Complete the following table, calculating the length of each fraction of dowel.

Length of dowel	$\frac{1}{4}$	$\frac{1}{3}$	$\frac{1}{2}$	$\frac{3}{4}$
15cm				
30cm		10cm		
48cm	12cm			
90cm				

14. Complete the following table, calculating the fraction of each amount of money.

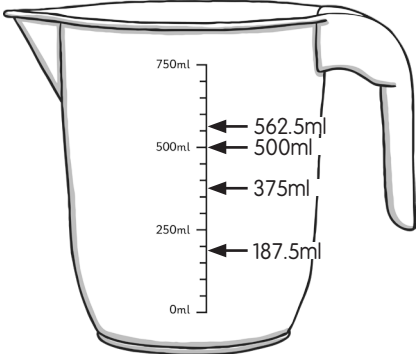
	$\frac{1}{5}$	$\frac{1}{2}$	$\frac{2}{3}$	$\frac{3}{4}$
£0.60			£0.40	
£1.20		£0.60		
£2.40	£0.48			
£3.60				
£6.00				

15. Draw lines on the scales below to show $\frac{1}{8}$, $\frac{3}{10}$, $\frac{2}{5}$, $\frac{2}{3}$ and $\frac{3}{4}$ of 2kg.



Answer Sheet: Key Stage 2 Maths Practice Reasoning: Simple Measure and Money Problems



question	answer	notes																																			
1	1 orange = 11p, 1 pear = 12p, 1 banana = 12p, 1 apple = 19p, 1 pineapple £1.20																																				
2	The most expensive fruit is oranges and pears at £2.28.																																				
3	Pineapple, pears and bananas = £2.88																																				
4	Pineapple = 40p Bananas = 48p Oranges = 88p																																				
5	£1.32 + 66p = £1.98																																				
6	fruit drink 65p, orange juice 96p, lemonade £1.28, cola £1.28																																				
7	1 750g lemonade is too small. 2 x750ml of lemonade is 1.5l – too big.																																				
8	166.67ml juice costing 16p																																				
9	Each glass will contain 125ml of lemonade and will cost 16p.																																				
10	The total profit is £3.96.	Cost of drinks is £1.92 Cost of 7 plastic tumblers is £1.12 Total profit = £7 - (£1.92 + £1.12)																																			
11	<table border="1" style="margin-left: auto; margin-right: auto;"> <thead> <tr> <th></th> <th>$\frac{1}{4}$</th> <th>$\frac{1}{2}$</th> <th>$\frac{2}{3}$</th> <th>$\frac{3}{4}$</th> </tr> </thead> <tbody> <tr> <td>100ml</td> <td>25ml</td> <td>50ml</td> <td>66.67ml</td> <td>75ml</td> </tr> <tr> <td>250ml</td> <td>62.5ml</td> <td>125ml</td> <td>166.67ml</td> <td>187.5ml</td> </tr> <tr> <td>500ml</td> <td>125ml</td> <td>250ml</td> <td>333.33ml</td> <td>375ml</td> </tr> <tr> <td>600ml</td> <td>150ml</td> <td>300ml</td> <td>400ml</td> <td>450ml</td> </tr> <tr> <td>800ml</td> <td>200ml</td> <td>400ml</td> <td>533.33ml</td> <td>600ml</td> </tr> <tr> <td>1 litre</td> <td>250ml</td> <td>500ml</td> <td>666.67ml</td> <td>750ml</td> </tr> </tbody> </table>		$\frac{1}{4}$	$\frac{1}{2}$	$\frac{2}{3}$	$\frac{3}{4}$	100ml	25ml	50ml	66.67ml	75ml	250ml	62.5ml	125ml	166.67ml	187.5ml	500ml	125ml	250ml	333.33ml	375ml	600ml	150ml	300ml	400ml	450ml	800ml	200ml	400ml	533.33ml	600ml	1 litre	250ml	500ml	666.67ml	750ml	
	$\frac{1}{4}$	$\frac{1}{2}$	$\frac{2}{3}$	$\frac{3}{4}$																																	
100ml	25ml	50ml	66.67ml	75ml																																	
250ml	62.5ml	125ml	166.67ml	187.5ml																																	
500ml	125ml	250ml	333.33ml	375ml																																	
600ml	150ml	300ml	400ml	450ml																																	
800ml	200ml	400ml	533.33ml	600ml																																	
1 litre	250ml	500ml	666.67ml	750ml																																	
12																																					

question	answer	notes																														
13	<table border="1"> <thead> <tr> <th>Length of dowel</th> <th>$\frac{1}{4}$</th> <th>$\frac{1}{3}$</th> <th>$\frac{1}{2}$</th> <th>$\frac{3}{4}$</th> </tr> </thead> <tbody> <tr> <td>15cm</td> <td>3.75cm</td> <td>5cm</td> <td>7.5cm</td> <td>11.25cm</td> </tr> <tr> <td>30cm</td> <td>7.5cm</td> <td>10cm</td> <td>15cm</td> <td>22.5cm</td> </tr> <tr> <td>48cm</td> <td>12cm</td> <td>16cm</td> <td>24cm</td> <td>36cm</td> </tr> <tr> <td>90cm</td> <td>22.5cm</td> <td>30cm</td> <td>45cm</td> <td>67.5cm</td> </tr> </tbody> </table>	Length of dowel	$\frac{1}{4}$	$\frac{1}{3}$	$\frac{1}{2}$	$\frac{3}{4}$	15cm	3.75cm	5cm	7.5cm	11.25cm	30cm	7.5cm	10cm	15cm	22.5cm	48cm	12cm	16cm	24cm	36cm	90cm	22.5cm	30cm	45cm	67.5cm						
Length of dowel	$\frac{1}{4}$	$\frac{1}{3}$	$\frac{1}{2}$	$\frac{3}{4}$																												
15cm	3.75cm	5cm	7.5cm	11.25cm																												
30cm	7.5cm	10cm	15cm	22.5cm																												
48cm	12cm	16cm	24cm	36cm																												
90cm	22.5cm	30cm	45cm	67.5cm																												
14	<table border="1"> <thead> <tr> <th></th> <th>$\frac{1}{5}$</th> <th>$\frac{1}{2}$</th> <th>$\frac{2}{3}$</th> <th>$\frac{3}{4}$</th> </tr> </thead> <tbody> <tr> <td>£0.60</td> <td>£0.12</td> <td>£0.30</td> <td>£0.40</td> <td>£0.45</td> </tr> <tr> <td>£1.20</td> <td>£0.24</td> <td>£0.60</td> <td>£0.80</td> <td>£0.90</td> </tr> <tr> <td>£2.40</td> <td>£0.48</td> <td>£1.20</td> <td>£1.60</td> <td>£1.80</td> </tr> <tr> <td>£3.60</td> <td>£0.72</td> <td>£1.80</td> <td>£2.40</td> <td>£2.70</td> </tr> <tr> <td>£6.00</td> <td>£1.20</td> <td>£3.00</td> <td>£4.00</td> <td>£4.50</td> </tr> </tbody> </table>		$\frac{1}{5}$	$\frac{1}{2}$	$\frac{2}{3}$	$\frac{3}{4}$	£0.60	£0.12	£0.30	£0.40	£0.45	£1.20	£0.24	£0.60	£0.80	£0.90	£2.40	£0.48	£1.20	£1.60	£1.80	£3.60	£0.72	£1.80	£2.40	£2.70	£6.00	£1.20	£3.00	£4.00	£4.50	
	$\frac{1}{5}$	$\frac{1}{2}$	$\frac{2}{3}$	$\frac{3}{4}$																												
£0.60	£0.12	£0.30	£0.40	£0.45																												
£1.20	£0.24	£0.60	£0.80	£0.90																												
£2.40	£0.48	£1.20	£1.60	£1.80																												
£3.60	£0.72	£1.80	£2.40	£2.70																												
£6.00	£1.20	£3.00	£4.00	£4.50																												
15	